

# Thursday 9<sup>th</sup> January

## Year 2 Home Learning



Miss Aitchison



Miss Crowther

## Winter Parcel

Today I'm like a parcel,  
wrapped up from top to toe,  
protected from the icy winds,  
the rain, the sleet and snow.

My head has got a hat on,  
my neck hides in a scarf,  
and on my hands some puppet gloves,  
a tiger and giraffe.

My coat is thick and furry,  
and does up very high.  
And on my feet I've special boots,  
to keep me warm and dry.

So though there's little of me  
that anyone can see,  
this walking, talking parcel is  
most definitely ME!



1 What are **three** types of weather in this poem?

1. \_\_\_\_\_

2. \_\_\_\_\_

3. \_\_\_\_\_

2 *my neck hides in a scarf*

What does this mean?

Tick **one**.

The child's neck  
is hurting.

The child's neck is  
covered.

The child is playing  
hide and seek.

The child's  
scarf is lost.

3 What **two** animals does the child wear on her hands?

1. \_\_\_\_\_

2. \_\_\_\_\_

4 **Find** and **copy two** words that show that the coat is warm.

1. \_\_\_\_\_

2. \_\_\_\_\_

5 How is the child in the poem like a parcel?

\_\_\_\_\_

\_\_\_\_\_

# Writing

Step outside or go on a Wintery Walk. Use your senses to describe what you can see, hear, touch, smell and taste.

We would like you to record your ideas using expanded noun phrases. An expanded noun phrase is a phrase made up of a noun and at least one adjective. If you list more than one adjective to describe the noun, you should add a comma to separate them.

Example:






white, fluffy snow



**Adjective**  
A word that describe a noun.



**Noun**  
A person, place or object.

I can see 	
I can hear 	
I can feel 	
I can smell 	
I can taste 	



# Maths

## Arithmetic

Use the column method to add and subtract two two-digit numbers.

a.				b.				c.				d.				e.			
	4	9			3	6			2	6			4	7			5	5	
-	2	3		+	3	2		+	3	1		+	2	2		-	3	2	

f.				g.				h.				i.				j.			
	8	4			2	4			4	8			7	1			6	3	
-	3	5		+	3	9		+	3	8		-	3	4		-	2	6	

## Problem Solving

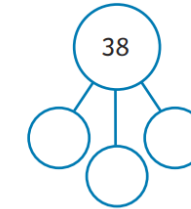
Have a go at these two-step addition and subtraction problems.

A bakery has 38 cupcakes to sell.  
12 cupcakes are vanilla, 15 cupcakes are chocolate and the rest are red velvet.  
How many cupcakes are red velvet?




$$12 + 15 = \square$$

$$38 - \square = \square$$



There 66 animals on a farm.  
There are 18 sheep,  
35 chickens and the rest  
are cows.

How many cows are there?



Minnie bought a bag of 16 sweets.  
She gives 7 sweets to her brother and then buys another bag of 16 sweets. How many sweets does Minnie have now?

$$\square - \square = \square$$

$$\square + \square = \square$$



Nina bought 42 tennis balls.  
5 got damaged and 14  
went missing.

How many tennis balls  
does she have left?



# Art

This half term our topic is Dinosaurs! We would like you to get creative with the materials you have available in your house and create your own dinosaur. Here are some ideas to help you.

You could use:

- Pasta/rice
- Paper plates
- Cardboard rolls
- Coloured paper
- Paints
- Foil
- Playdough

We would love to see anything you create, so bring in your creations once we return to school!

