



Friday 10th January

Maples Home Learning

Mr White



Maths
Reading
Writing
Explorative play



Maths

$$\text{8 bunches of grapes} + \text{4 bunches of grapes} = \bigcirc$$

$$\text{3 pineapples} + \text{1 pineapple} = \bigcirc$$

$$\text{4 cans of pears} + \text{2 cans of pears} = \bigcirc$$

$$\text{1 orange} + \text{5 oranges} = \bigcirc$$

Count and write or circle the number.



5

6


1



4

3


6



5

7

8



8

5

9

Reading

Read the CVC word and match it to the picture.



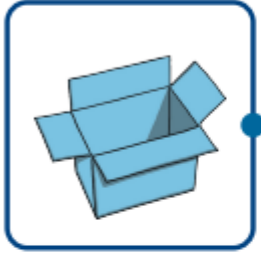
dog



jog



cob



log



hot



mop








pop








box

Writing

Write the initial sound to match the picture.

Modelling Dough Skills



flatten



spiral



cylinder roll



indent



cut out



pierce



push




twist



plait



squeeze



thread



roll (into a ball)



imprint



roll (with a rolling pin)



cut

Using the dough, you made yesterday, practise these modelling skills.